

Name: _____

Number Order

Instructions: Write the numbers in the correct order.




_____, _____, _____




_____, _____, _____




_____, _____, _____



_____, _____, _____



_____, _____, _____




_____, _____, _____



_____, _____, _____




_____, _____, _____




_____, _____, _____



_____, _____, _____




_____, _____, _____



_____, _____, _____



_____, _____, _____




_____, _____, _____

Name: _____

Composing and Decomposing Numbers

Instructions: Write 2 addition problems for each number.



$$\begin{array}{r} \underline{\quad} + \underline{\quad} = \underline{\quad} \\ \underline{\quad} + \underline{\quad} = \underline{\quad} \end{array}$$



$$\begin{array}{r} \underline{\quad} + \underline{\quad} = \underline{\quad} \\ \underline{\quad} + \underline{\quad} = \underline{\quad} \end{array}$$



$$\begin{array}{r} \underline{\quad} + \underline{\quad} = \underline{\quad} \\ \underline{\quad} + \underline{\quad} = \underline{\quad} \end{array}$$



$$\begin{array}{r} \underline{\quad} + \underline{\quad} = \underline{\quad} \\ \underline{\quad} + \underline{\quad} = \underline{\quad} \end{array}$$



$$\begin{array}{r} \underline{\quad} + \underline{\quad} = \underline{\quad} \\ \underline{\quad} + \underline{\quad} = \underline{\quad} \end{array}$$



$$\begin{array}{r} \underline{\quad} + \underline{\quad} = \underline{\quad} \\ \underline{\quad} + \underline{\quad} = \underline{\quad} \end{array}$$



$$\begin{array}{r} \underline{\quad} + \underline{\quad} = \underline{\quad} \\ \underline{\quad} + \underline{\quad} = \underline{\quad} \end{array}$$



$$\begin{array}{r} \underline{\quad} + \underline{\quad} = \underline{\quad} \\ \underline{\quad} + \underline{\quad} = \underline{\quad} \end{array}$$





$$\begin{array}{r} \underline{\quad} + \underline{\quad} = \underline{\quad} \\ \underline{\quad} + \underline{\quad} = \underline{\quad} \end{array}$$

Name: _____

Comparing Numbers

Instructions: Color the heart with the largest of the 3 numbers.



Name: _____

+10/-10 and +1/-1

Instructions: Fill in the missing numbers.

	63	
	73	74

17	18	
	28	

	99	
	109	
	119	

	64	65

101	102	

	15	
	25	

	97	

	38	

	54	

Name: _____

Addition Facts

Instructions: Solve the addition facts.
Then, color by the code.

10 - red 11 - pink 12 - gray 13 - purple 14 - white

