


Name: \_\_\_\_\_

## 3-Addend Spinner

Instructions: Use a paperclip to spin numbers. Record them in the boxes. Then, add them.

<input type="text"/>	<input type="text"/>	<input type="text"/>
<input type="text"/>	<input type="text"/>	<input type="text"/>
+	+	+
<input type="text"/>	<input type="text"/>	<input type="text"/>
_____	_____	_____












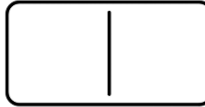


<input type="text"/>	<input type="text"/>	<input type="text"/>	<input type="text"/>	<input type="text"/>
<input type="text"/>	<input type="text"/>	<input type="text"/>	<input type="text"/>	<input type="text"/>
+	+	+	+	+
<input type="text"/>	<input type="text"/>	<input type="text"/>	<input type="text"/>	<input type="text"/>
_____	_____	_____	_____	_____

<input type="text"/>	<input type="text"/>	<input type="text"/>	<input type="text"/>	<input type="text"/>
<input type="text"/>	<input type="text"/>	<input type="text"/>	<input type="text"/>	<input type="text"/>
+	+	+	+	+
<input type="text"/>	<input type="text"/>	<input type="text"/>	<input type="text"/>	<input type="text"/>
_____	_____	_____	_____	_____


Name: \_\_\_\_\_

## Domino Sort

Instructions: Cut and paste the dominos onto the blank ones.  
Then write addition sentences for them.

Equal to 10	NOT Equal to 10
 _____ + _____ = _____	 _____ + _____ = _____
 _____ + _____ = _____	 _____ + _____ = _____
 _____ + _____ = _____	 _____ + _____ = _____
 _____ + _____ = _____	 _____ + _____ = _____
 _____ + _____ = _____	 _____ + _____ = _____
 _____ + _____ = _____	 _____ + _____ = _____

©The Stay-at-Home Teacher



Name: \_\_\_\_\_

## Balancing Equations

Instructions: Use the Christmas tree counters to help you find the missing numbers.

$3+4 = 6+ \underline{\quad}$

$1+2 = 3+ \underline{\quad}$

$2+ \underline{\quad} = 5+3$

$7+ \underline{\quad} = 4+4$

$7+5 = \underline{\quad}+8$

$8+2 = \underline{\quad}+6$

$\underline{\quad}+0 = 5+1$

$\underline{\quad}+5 = 9+0$

$9+4 = 4+ \underline{\quad}$

$6+5 = 7+ \underline{\quad}$

$5+ \underline{\quad} = 2+6$

$0+ \underline{\quad} = 1+4$

$3+9 = \underline{\quad}+10$

$9+2 = \underline{\quad}+3$

$\underline{\quad}+1 = 6+3$

$\underline{\quad}+8 = 4+9$


©The Stay-at-Home Teacher




Name: \_\_\_\_\_

## Fact Family Gifts


Instructions: Use the numbers on the gifts to complete fact families.




$$\begin{array}{l} + \quad \_ \quad = \quad \_ \\ + \quad \_ \quad = \quad \_ \\ - \quad \_ \quad = \quad \_ \\ - \quad \_ \quad = \quad \_ \end{array}$$




$$\begin{array}{l} + \quad \_ \quad = \quad \_ \\ + \quad \_ \quad = \quad \_ \\ - \quad \_ \quad = \quad \_ \\ - \quad \_ \quad = \quad \_ \end{array}$$




$$\begin{array}{l} + \quad \_ \quad = \quad \_ \\ + \quad \_ \quad = \quad \_ \\ - \quad \_ \quad = \quad \_ \\ - \quad \_ \quad = \quad \_ \end{array}$$




$$\begin{array}{l} + \quad \_ \quad = \quad \_ \\ + \quad \_ \quad = \quad \_ \\ - \quad \_ \quad = \quad \_ \\ - \quad \_ \quad = \quad \_ \end{array}$$




$$\begin{array}{l} + \quad \_ \quad = \quad \_ \\ + \quad \_ \quad = \quad \_ \\ - \quad \_ \quad = \quad \_ \\ - \quad \_ \quad = \quad \_ \end{array}$$




$$\begin{array}{l} + \quad \_ \quad = \quad \_ \\ + \quad \_ \quad = \quad \_ \\ - \quad \_ \quad = \quad \_ \\ - \quad \_ \quad = \quad \_ \end{array}$$



$$\begin{array}{l} + \quad \_ \quad = \quad \_ \\ + \quad \_ \quad = \quad \_ \\ - \quad \_ \quad = \quad \_ \\ - \quad \_ \quad = \quad \_ \end{array}$$



$$\begin{array}{l} + \quad \_ \quad = \quad \_ \\ + \quad \_ \quad = \quad \_ \\ - \quad \_ \quad = \quad \_ \\ - \quad \_ \quad = \quad \_ \end{array}$$



$$\begin{array}{l} + \quad \_ \quad = \quad \_ \\ + \quad \_ \quad = \quad \_ \\ - \quad \_ \quad = \quad \_ \\ - \quad \_ \quad = \quad \_ \end{array}$$

Name: \_\_\_\_\_

## Balance or Not?

Instructions: Cut and sort the addition sentences.

Balanced	Not Balanced

©The Stay-at-Home Teacher

$$4+7 = 8+2$$

$$2+5 = 6+1$$

$$3+8 = 10+1$$

$$9+6 = 0+14$$

$$9+2 = 5+7$$

$$2+4 = 5+1$$

$$10+3 = 9+3$$

$$6+2 = 7+5$$

$$1+8 = 4+5$$

$$3+5 = 4+6$$