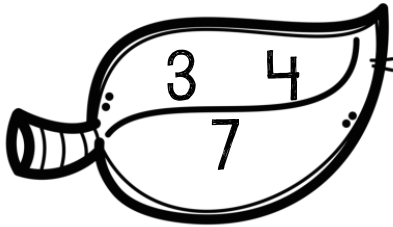


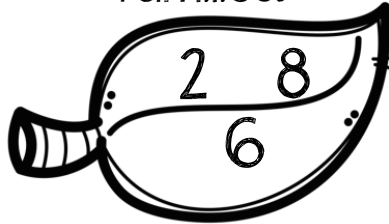
Name: _____

Fact Families

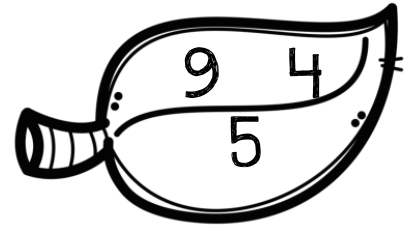
Instructions: Use the numbers on the turkeys to complete fact families.



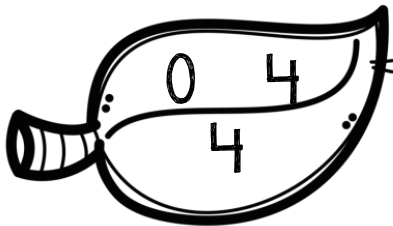
+ - =
- + =
- - =
- - =



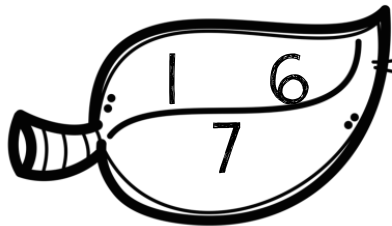
+ - =
- + =
- - =
- - =




+ - =
- + =
- - =
- - =




+ - =
- + =
- - =
- - =




+ - =
- + =
- - =
- - =



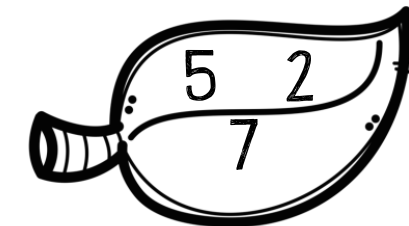
+ - =
- + =
- - =
- - =



+ - =
- + =
- - =
- - =



+ - =
- + =
- - =
- - =



+ - =
- + =
- - =
- - =

Name: _____




Odd/Even Pies

Instructions: Answer the subtraction problems.
Then color by the code.

Odd - red


Even - brown



Name: _____

Fact Families of 10

Instructions: Fill in the missing numbers in the fact families.




$$8 + \underline{\quad} = 10$$

$$2 + \underline{\quad} = 10$$

$$\underline{\quad} - 8 = 2$$

$$\underline{\quad} - 2 = 8$$




$$\underline{\quad} + 7 = 10$$

$$7 + \underline{\quad} = 10$$

$$10 - \underline{\quad} = 3$$

$$\underline{\quad} - 3 = 7$$



$$6 + \underline{\quad} = 10$$

$$\underline{\quad} + 6 = 10$$

$$\underline{\quad} - 6 = 4$$

$$10 - 4 = \underline{\quad}$$




$$1 + 9 = \underline{\quad}$$

$$9 + \underline{\quad} = 10$$

$$\underline{\quad} - 1 = 9$$

$$\underline{\quad} - 9 = 1$$




$$5 + \underline{\quad} = 10$$

$$5 + 5 = \underline{\quad}$$

$$10 - 5 = \underline{\quad}$$

$$\underline{\quad} - 5 = 5$$



$$0 + \underline{\quad} = 10$$

$$\underline{\quad} + 10 = 10$$

$$\underline{\quad} - 0 = 10$$

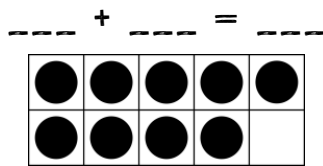
$$10 - 10 = \underline{\quad}$$

Name: _____

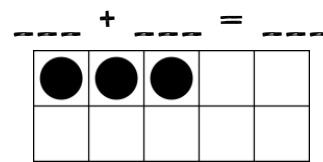
“Making 10” Word Problems

Instructions: Use the 10 Frames to help solve the word problems.

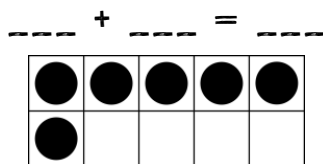
1. There were 9 crows in a tree. 1 more crow landed. How many crows are there now?



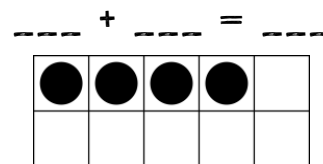
2. I have 3 pies. Sam has 7. How many do we have together?



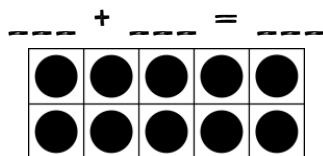
3. I had 6 leaves. Then I got 4 more. How many leaves do I have now?



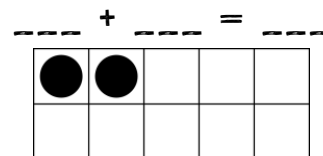
4. Tom had 4 acorns. He found 6 more. How many acorns does he have now?



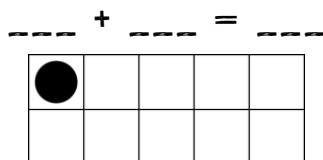
5. I have 10 pumpkins. Mom has 0. How many pumpkins do we have together?



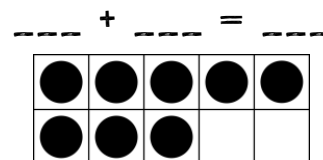
6. There were 2 turkeys. I found 8 more. How many turkeys are there now?



7. Pat has 1 leaf. Hal has 9 leaves. How many do they have in all?



8. I found 8 hats. I found 2 more. How many hats are there?



Name: _____

Mystery Picture

Instructions: Color by the code.

Black - 3, 4, 5, 6, 7, 8, 13, 14, 15, 16, 17, 18, 23, 24, 27, 28, 31, 32, 33, 34,
35, 36, 37, 38, 39, 40, 54, 57

Tan - 43, 44, 45, 46, 47, 48, 52, 53, 55, 56, 58, 59, 62, 63, 64, 65,
66, 67, 68, 69, 73, 75, 76, 78, 83, 84, 87, 88, 93, 94, 95, 96, 97, 98

Yellow - 25, 26 Red - 74, 77, 85, 86

1	2	3	4	5	6	7	8	9	10
11	12	13	14	15	16	17	18	19	20
21	22	23	24	25	26	27	28	29	30
31	32	33	34	35	36	37	38	39	40
41	42	43	44	45	46	47	48	49	50
51	52	53	54	55	56	57	58	59	60
61	62	63	64	65	66	67	68	69	70
71	72	73	74	75	76	77	78	79	80
81	82	83	84	85	86	87	88	89	90
91	92	93	94	95	96	97	98	99	100