

Name _____

SKIP COUNTING

Skip count to fill in the missing numbers

2	4					14
---	---	--	--	--	--	----


3		7	9		13	
---	--	---	---	--	----	--

1	4	7				19
---	---	---	--	--	--	----

20	25	30				
----	----	----	--	--	--	--

11	21			51
----	----	--	--	----

7	17			47
---	----	--	--	----



Name _____

COUNT IT UP









Find the total amount for each group of coins. Write the sum in the box. Then color the coins.

<div data-bbox="66 434 329 699" style="border: 1px dashed black; height: 126px; width: 162px;"></div>     	<div data-bbox="821 434 1078 699" style="border: 1px dashed black; height: 126px; width: 158px;"></div>      
<div data-bbox="66 968 329 1232" style="border: 1px dashed black; height: 126px; width: 162px;"></div>      	<div data-bbox="821 968 1078 1232" style="border: 1px dashed black; height: 126px; width: 158px;"></div>       
<div data-bbox="66 1501 329 1766" style="border: 1px dashed black; height: 126px; width: 162px;"></div>      	<div data-bbox="821 1501 1078 1766" style="border: 1px dashed black; height: 126px; width: 158px;"></div>      

Name _____

NIFTY NUMBERS

Write addition sentences that equal the number in the middle of the flower. Use the example to help you.



Name _____

SPRING SOLVING

Read each story problem and solve it. Show how you solved it and write the matching number sentence.

Latoya saw 12 baby birds in the nest and 5 flying around. How many baby birds were there in all?

Athena planted 7 daisies and 12 marigolds. How many more marigolds did she plant?



In March, it rained for 11 days. In April, it rained for 9 days. How many days did it rain in March and April?

There were 6 ladybugs, 3 beetles, and 5 dragonflies in Sam's backyard. How many insects were there in all?